

MATHS WORKSHEETS

TOPIC: NUMBERS



***Thank you for downloading this free printable from
www.pappucreativespace.com***

This printable is free for personal and classroom use. Please do not sell or redistribute this PDF file, instead share my website link.

If you found any mistakes in this printable, or having any questions/suggestions, please email me at pappucreativespace@gmail.com

© **pappucreativespace.com**

NUMBER

1

Count the number of ones and colour the answer





2	3	1	6	
5	1	7	8	1

5


4

6

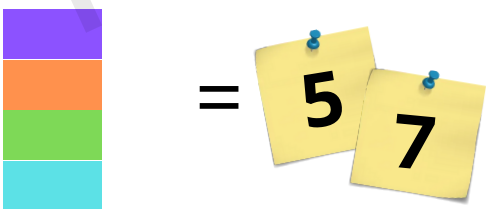
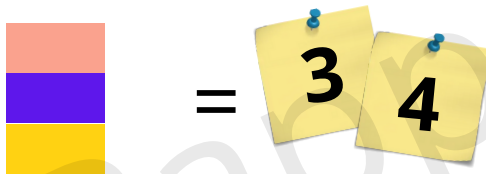
Subtract one from each set and circle the right answer



Four trains are in the station. Three leaves on time. How many are waiting?



Add one block in each set and circle the right answer



Colour the box which gives the answer number one

3-2


1+1

1+2

4-3

Colour the picture

Only One!



NUMBER





2

Count the number of twos and colour the answer

2 3 4 2
5 1 9 8 7

3 4 6

Subtract two from each set and circle the right answer




There are five birds sitting in a tree. Three fly away. How many are left?



=

Add two items in each set and circle the right answer



Colour the box which gives the answer number two

$2+2$

$4-2$

$10-8$

$5+1$

Colour the picture

Only two!



NUMBER




3

Count the number of threes and colour the answer

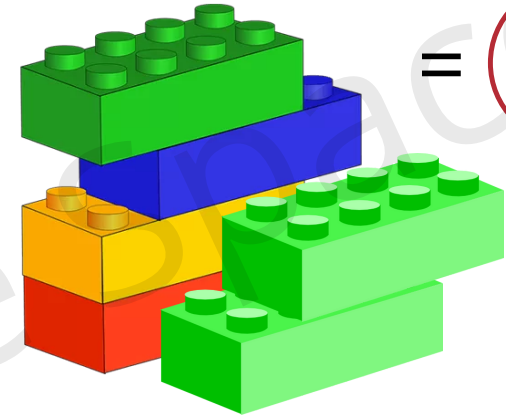
2 3 3 3
5 1 6 8 3

3 4 5

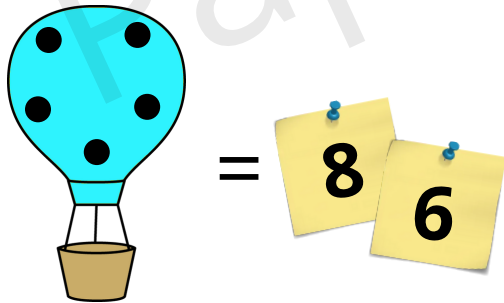

Subtract three from each set and circle the right answer



There are six blocks. Three fall down. How many are left?



Add three dots in each object and circle the right answer



Colour the box which gives the answer number three

2+1


4+1

6-3

2+2

Colour the picture

Only three!



NUMBER

4

Count the number of fours
and colour the answer





2 4 10 8
5 1 6 4 7

3

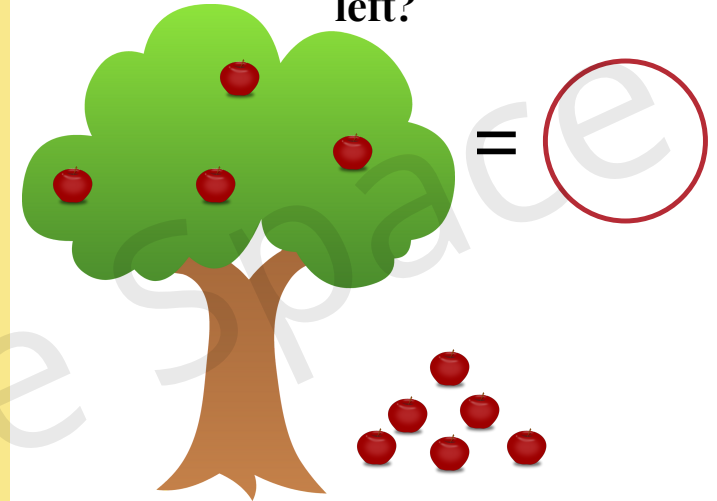
2

6


Subtract four from each set
and circle the right answer



There are ten apples in the tree.
Six fall down. How many are
left?



Add four sweets in each item
and circle the right answer



=

8

10



=

7

9

Colour the box which gives the
answer number four

3+3


1+3

7-3

3+4

Colour the picture

Only four!



© pappucreativespace.com

Good job!

NUMBER





5

Count the number of fives and colour the answer

5 4 5 5
5 5 6 9 5

9 7 6

Subtract five from each set and circle the right answer

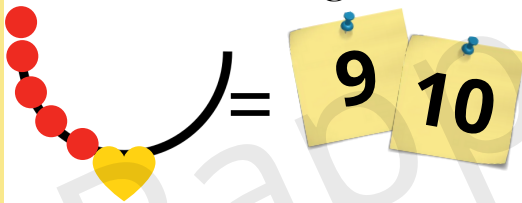


There are ten balloons tied up. Five balloons blew away. How many are left?




=

Add five count in each object and circle the right answer



= 9 10



= 8 6

Colour the box which gives the answer number five

4+1

2+6

1+0

10-5

Colour the picture

Only five!



© pappucreativespace.com

Good job!

NUMBER




6

Count the number of Sixes and colour the answer

4 6 6 10
1 3 7 9 8

3 2 1

Subtract Six from each set and circle the right answer




There are ten rabbits. Four hop away. How many are left?



=

Add Six count in each object and circle the right answer



Colour the box which gives the answer number Six

5+1

3+0

10-4

3-1

Colour the picture

Only Six!



NUMBER







Count the number of Sevens and colour the answer

7	6	1	10	
7	3	7	9	8

3 5 4

Subtract Seven from each set and circle the right answer



There are twelve dogs. Five ran away. How many are left?



=

Add and circle the right answer

$1 + 7 = 9$ 8

$7 + 2 = 9$ 10

Colour the box which gives the answer number Seven

$10 - 3$

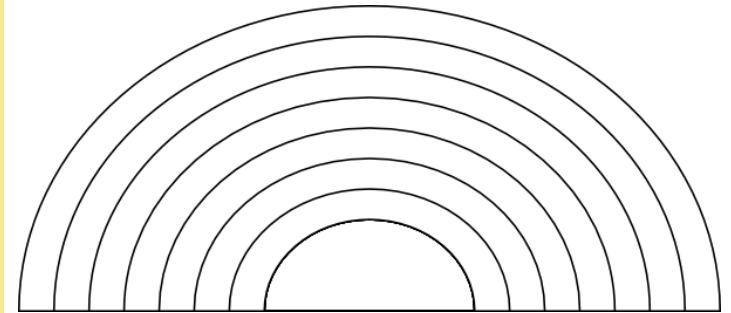
$4 + 3$

$1 + 2$

$3 + 6$

Colour the picture

Only Seven!



NUMBER



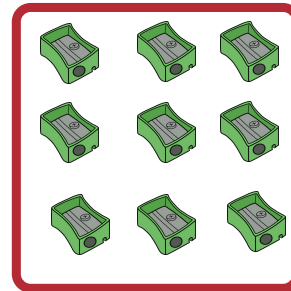



Count the number of Eights and colour the answer


8	6	1	8	
7	3	8	9	8

- (3) (7) (4)

Subtract Eight from each set and circle the right answer



There are fifteen cars. Seven ride away. How many are left?



Find the correct answer to get the sum of Eight

1 + 2 = 8 ?

5 + 6 = 8 ?

2 + 2 = 8 ?

3 + 4 = 8 ?

Colour the box which gives the answer number Eight

1+7

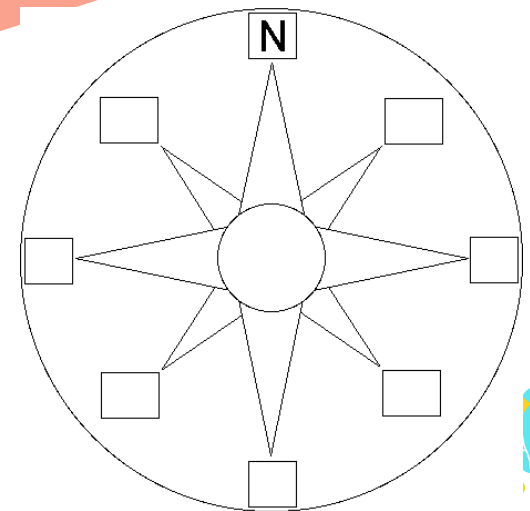
1-1

2-1

4+4

Colour the picture

Only Eight!



NUMBER



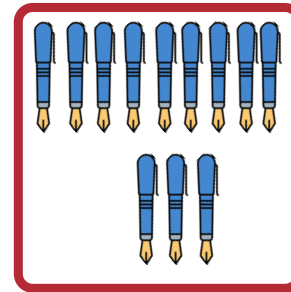

9

Count the number of Nines and colour the answer

8	6	1	4	
7	3	9	9	0

3 **2** **4**

Subtract Nine from each set and circle the right answer



There are twenty Hot air balloons. Eleven fly away. How many are left?



= **9**

Add Nine items in each set and circle the right answer



9 **10**



11 **12**

Colour the box which gives the answer number Nine

1+5


10-1

8+1

4+0

Colour the picture

Only Nine!



NUMBER



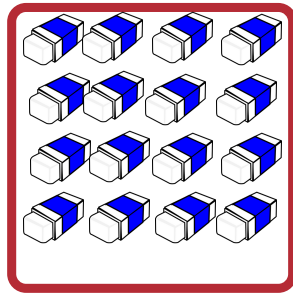
10

Count the number of tens and colour the answer

10	6	1	4	
7	3	9	5	0

3 2 1

Subtract ten from each set and circle the right answer



There are twenty teddies in a shop. Ten Sold out. How many are left?



=

Add and circle the right answer

$10 + 1 =$ 11 10

$2 + 10 =$ 13 12

Colour the box which gives the answer number ten

5+0

6-0

9+1

11-1

Colour the picture

Only Ten!

